




Name: \_\_\_\_\_ Date: \_\_\_\_\_



Can you label these circuit symbols to show what they represent?



Now draw a circuit using these symbols according to each description. Don't forget to use a ruler!



Circuit with battery, bulb, open switch, buzzer and wires:

Circuit with two batteries, motor, closed switch and wires:

Blank space for drawing a circuit with a battery, bulb, open switch, buzzer, and wires.

Blank space for drawing a circuit with two batteries, motor, closed switch, and wires.