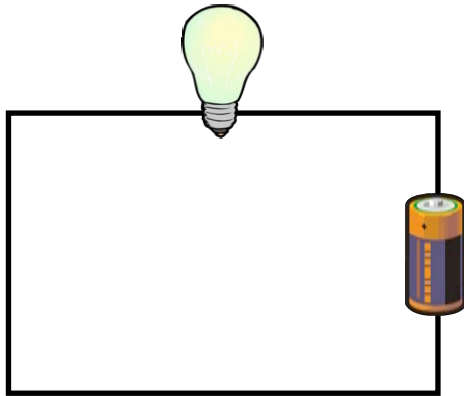


Name: \_\_\_\_\_ Date: \_\_\_\_\_

Can you alter these circuits so that the bulbs are as bright as possible? Each bulb can take 5V and each battery is 1.5V. Describe what you have done in each picture.



---

---

---

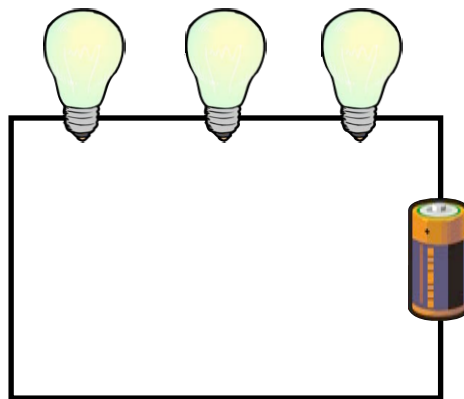
---

---

---

---

---



---

---

---

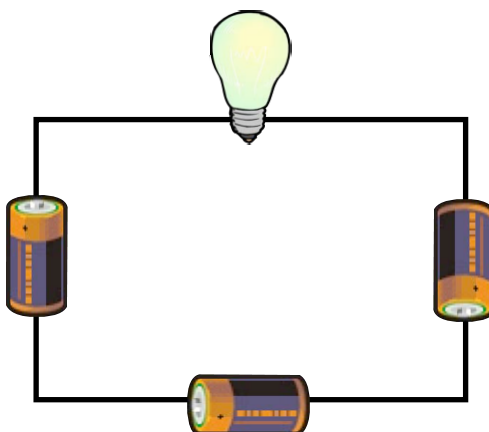
---

---

---

---

---



---

---

---

---

---

---

---

---